


20. 1 dan 5 gacha bo'lgan sonlar bilan amallar bajarish

amallar
qo'shish va ayirish



1. Qora kataklarga sonlarni, havorang kataklarga taqqoslash belgilarini yozing.




--	--	--



--	--	--



2. Rasmdan foydalanib, misollar tuzing va ularni yeching.



3. Bo'sh kataklarga qanday sonlarni yozish kerak?



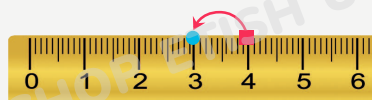
$$2 + 1 = \square$$



$$\square + \square = \square$$



$$\square + \square = \square$$



$$4 - 1 = \square$$



$$\square - 3 = \square$$



$$6 - 2 = \square$$

20. 1 dan 5 gacha bo'lgan sonlar bilan amallar bajarish

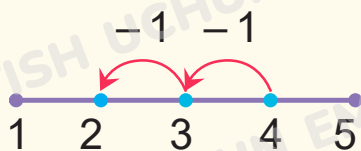


4. Chizg'ichdan foydalanib, misollarni yeching.

3 + 2	5 - 1	4 - 2	3 + 3
2 + 1	3 + 1	4 + 1	7 - 2

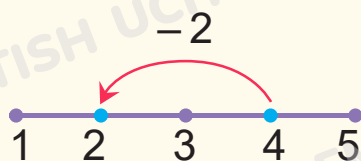
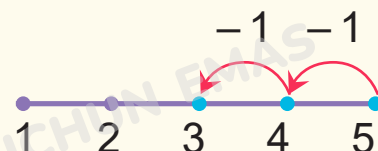


5. Rasmlar va misollarni chiziqlar yordamida bog'lang.



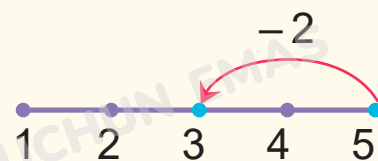
$$4 - 2$$

$$5 - 1 - 1$$

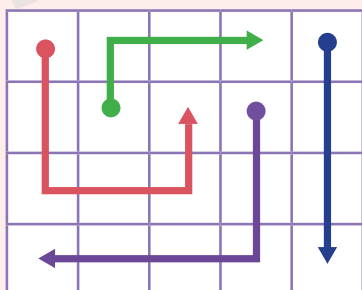


$$4 - 1 - 1$$

$$5 - 2$$



6. Rasmdagi yordamchi chiziqlardan foydalanib, maqolni toping.



O	O	L	A	E
D	B	I	M	L
O	B	L	A	G
R	U	Z	N	A



7. Chizg'ich yordamida taqqoslang.



$$2 \square 3$$

$$4 \square 5$$

$$1 \square 5$$

$$5 \square 3$$

$$4 \square 2$$