


95. Shartni yetishmayotgan ma'lumotlar bilan to'ldirish

to'liqsiz shart
savol



1. Matnlarni shunday to'ldiringki, ulardan masala hosil bo'lsin.

Oilaviy albomda
15 ta oq-qora va
55 ta rangli suratlar bor.

Hurmat taxtasida
15 nafar o'quvchi va
12 nafar o'qituvchi
suratlari bor.

2. Rasmlarga qarab,
masala shartini
to'ldiring.
Maktab binosida
___ ta kamera,
hovlisida ___ ta
kamera o'rnatilgan.
Maktabda nechta
kamera bor?



3. Berilgan shart bo'yicha
sonli ifoda tuzing va
hisoblang.

1önl. 3 birl.	+	5önl. 6 birl.	=
=			
7önl. 8 birl.	-	2önl. 1 birl.	=
=			
3önl. 9 birl.	+	4önl.	=
=			

95. Shartni yetishmayotgan ma'lumotlar bilan to'ldirish

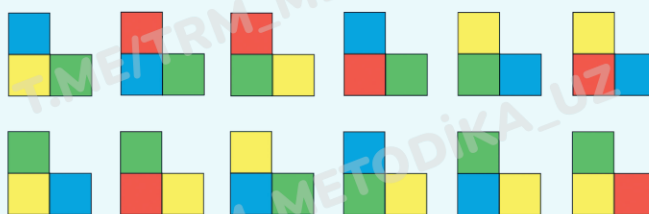
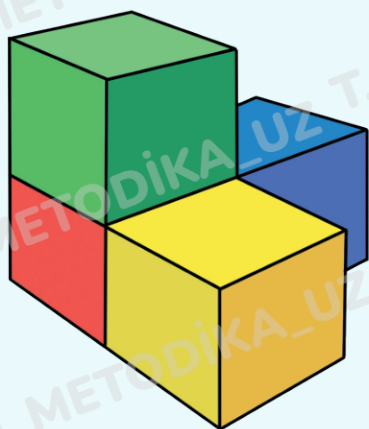


4. Juftliklarni tutashtiring.

sutka	yanvar	soat	hafta	yil
•	•	•	•	•
•	•	•	•	•
12	24	7	31	60



5. Agar shaklga yonidan, yuqoridan, pastdan qarasangiz, uning ko'rinishi qanday shaklga o'xshaydi? To'g'ri variantlarni qalam bilan aylanaga oling.



6. Qonuniyatni aniqlang va bo'sh doirachalarni to'ldiring. Shaklning chap va o'ng qismlari nimasi bilan o'xshash?

