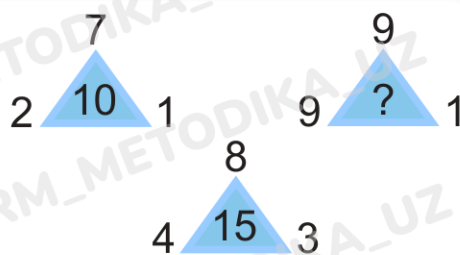


125. Alohida berilgan qismlardan shakllar tuzish

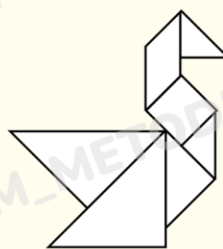
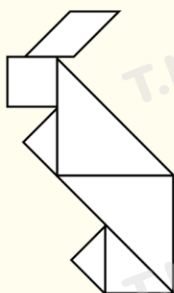
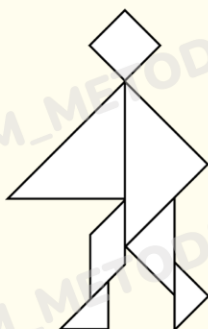
uchburchak
to'rtburchak
tangram



1. Tangramda burchaklarning qanday turlari bor?
Tangramda qanday shakllar bor?
Tangramda teng shakllar bormi?
Tangramda nechta uchburchak bor?
To'rtburchaklar-chi?



2. Tangram qismlaridan shakllar yasashga yordam bering.
Qismlarni kerakli rangga bo'yang.



3. Sxema bo'yicha masala tuzing va uni yeching.



