

## 71. Massa birliklari

**Yondosh mavzu:**  
ko'targichlar.

Tonna, sentner,  
kilogramm, gramm, massa.

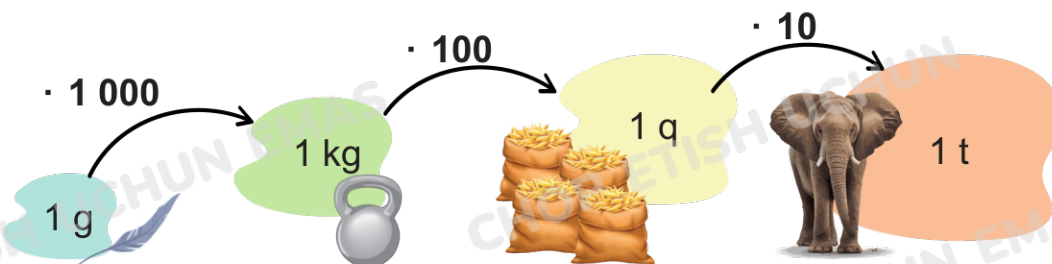


1. Predmetlarni ular massasining o'sishi tartibida ayting.



Ularning massasini o'lchashda qanday birliklardan foydalandingiz?

**Massa gramm, kilogramm, sentner va tonnalarida o'lchanadi.**



2. Berilgan massa birliklarida ifodalang.

$$4\ 656\ \text{kg} = \square\ \text{t}\ \square\ \text{kg}$$

$$30\ 583\ \text{g} = \square\ \text{kg}\ \square\ \text{g}$$

$$720\ \text{q} = \square\ \text{t}$$

$$72\ \text{t}\ 482\ \text{kg} = \square\ \text{kg}$$

$$56\ \text{q}\ 73\ \text{kg} = \square\ \text{kg}$$

$$30\ 000\ \text{kg} = \square\ \text{t}$$

3. Eng kichik o'lchov birligiga o'tkazib hisoblang.

$$45\ \text{kg}\ 29\ \text{g} - 29\ \text{kg}\ 342\ \text{g}$$

$$(8\ \text{t}\ 42\ \text{kg} - 3\ \text{t}\ 145\ \text{kg}) \cdot 7$$

$$5\ \text{t} - 9\ \text{q}\ 71\ \text{kg}$$

$$83\ \text{t}\ 550\ \text{kg} : 3 + 23\ \text{q}$$

4. Tenglamalarni yeching.

$$x \cdot 4 = 5\ \text{t}\ 18\ \text{kg} - 3\ \text{q}\ 26\ \text{kg}$$


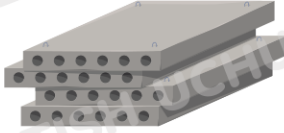

$$y : 3 = 2\ \text{t}\ 2\ \text{q}\ 67\ \text{kg} + 123\ \text{kg}$$



5. Qurilish krani g'isht bloklari, beton plitalar va qoplangan qumlarni ko'taradi. Kranning yuk ko'tarish quvvati – kran ko'tarishga qodir bo'lgan massa 30t.

Jadvaldan foydalanib,

- a) yukning umumiy massasini;  
b) kran bu yukni ko'tarish yoki ko'tara olmasligini aniqlang.

	 G'isht bloklari	 Beton plitalar	 Qoplangan qumlar
Miqdori	6	4	18
Bir birlikning massasi	1 110 kg	6 t 500 kg	50 kg



6. Ifodalarni taqqoslang.

$$(30\ 075 + 2\ 375) + 4\ 016 \quad \square \quad 30\ 075 + (2\ 375 + 4\ 019)$$

$$92\ 875 + 28\ 577 \quad \square \quad 28\ 574 + 92\ 871$$

$$(773 + 338) \cdot 5 \quad \square \quad (773 - 338) \cdot 5$$

$$106 \cdot (34 \cdot 23) \quad \square \quad (106 \cdot 34) \cdot 23$$



7. Ifodalarni hisoblang. Bu yerda qanday ko'targichlarning nomi yashiringan?


a)  $567\ 234 : 9 + 24 \cdot (83\ 668 - 82\ 474)$

7 164	63 026	1 214	1 194	34 370	91 682	28 656
<b>A</b>	<b>I</b>	<b>E</b>	<b>L</b>	<b>O</b>	<b>T</b>	<b>F</b>



b)  $(123 - 4 \cdot 8) \cdot 3 : 7 + 16 + (48 - 27 - 6) \cdot 5$

15	39	130	273	55
<b>A</b>	<b>A</b>	<b>R</b>	<b>L</b>	<b>O</b>
21	91	75	32	48
<b>K</b>	<b>S</b>	<b>T</b>	<b>E</b>	<b>M</b>



## 71. Massa birliklari



8. Uyga 500 kg yuk ko'tara oladigan lift o'rnatilgan. Liftda uchta quruvchi ko'tarilmoqda. Ularning massasi 85 kg, 92 kg va 103 kg. Agar bir qop sementning massasi 20 kg bo'lsa, ular o'zlari bilan necha qop sement olishlari mumkin?



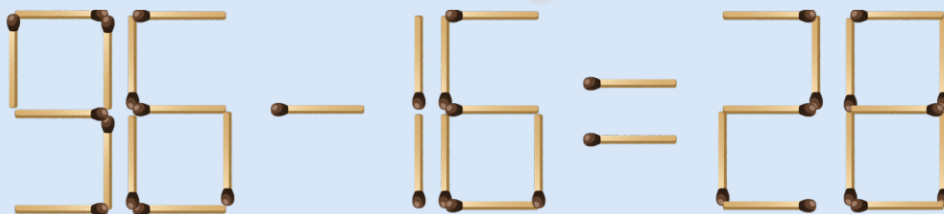
9. Sinfdoshingiz bilan musobaqalashing. Kim o'zining sehri kvadratini tezroq to'ldirdi? Kim buni to'g'ri bajardi?

7		10	32
	8	9	32
			35
32	34	33	

21		15	49
	7		40
		20	50
43	43	53	



10. Ikki cho'pni shunday olingki, natijada tenglik to'g'ri bo'lsin.



11. Ifodalar tuzing va ularning qiymatini toping.

- 28477 soniga 13838 va 9934 sonlari ayirmasini qo'shing.
- 548 va 89 sonlari ko'paytmasidan 42874 sonini ayiring.
- 70377 va 69979 sonlari ayirmasini 18 marta orttiring.
- 80160 sonini 16 va 5 sonlari ko'paytmasiga bo'ling.



12. Liftning yuk ko'tarish quvvati 1600 kg. Liftga har biri 25 kg bo'lgan 32 qop shakar va har biri 20 kg bo'lgan 48 yashik kungaboqar yog'i yuklandi. Lift me'yordan ortiq yuk ortilganligi haqida signal berdi. Liftga me'yordan qancha ko'p yuk ortilgan?